

AOS

ASIAN OLYMPIAD SOCIETY

ARAO

ASIAN REASONING & APTITUDE OLYMPIAD 2020-2021

CLASS

3

INSTRUCTIONS AND INFORMATION FOR THE CANDIDATE

GENERAL

1. Do not open the booklet until told to do so by your teacher.
2. No calculators, maths stencils, mobile phones or other calculating devices are permitted. Scribbling paper, graph paper, ruler and compasses are permitted, but are not essential.
3. Read the instructions on the answer sheet carefully. Ensure your name, school name and class are entered. It is your responsibility to correctly code your answer sheet.

THE ANSWER SHEET

1. Use an HB pencil or a Blue/Black ball point pen only to record your choice of answer in the Answer sheet.
2. Your answer sheet will be scanned. The optical scanner will attempt to read all markings even if they are in the wrong places, so please be careful not to write anything extra on the answer sheet.
3. If you want to change an answer or remove any marks, use a plastic eraser and be sure to remove all marks and smudges.
4. Fill your enrollment number clearly, improper enrollment number may lead to unavailability of result.
5. Please fill your Mobile Number clearly on the Answer Sheet, we will share your marks / result and other information related to AOS exams on your mobile number.
6. All questions are compulsory and there is no negative marking.
7. Return the ANSWER SHEET to the invigilator at the end of the exam.

INTEGRITY OF THE COMPETITION

The AOS reserves the right to re-examine students before deciding whether to grant official status to their score.


ENROLLMENT NUMBER : _____ CLASS : _____





STUDENT NAME : _____ Contact No : _____

1. At a ticket counter, 35 people are standing in a row. Amit is 15th from ticket counter. What is his position from the end?

- a) 19th b) 20th c) 21st d) 22nd

2. What will come next in the pattern



a) 
 b) 
 c) 
 d) 

3. Find the next number in the given series.

5, 7, 6, 9, 7, 11, 8, 13, ____, ____

- a) 5, 9 b) 14, 16 c) 9, 15 d) 10, 17

4. Cattle : Herd :: Fish : ?

- a) Zeal b) Peak c) Shoal d) Swarm

5. Arrange the following words in dictionary order.

1. Save 2. Savage 3. Savour 4. Saviour 5. Sausage

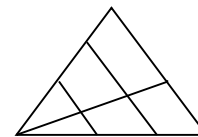
- a) 1, 3, 5, 4, 2 b) 5, 2, 1, 4, 3 c) 5, 3, 4, 2, 1 d) 5, 4, 3, 1, 2

6. Find the odd one out

- a) 1122 b) 2233 c) 3007 d) 4466

7. How many triangles are there in the given figure

- a) 10 b) 9 c) 14 d) 6



8. Find the next term in the given series

VW, AB, WX, BC, ?

- a) CD b) XY c) DE d) YX

9. In the question, four words have been given out of which three are alike in some manner, while fourth one is different. Choose the word which is different from the rest.

- a) Coat b) Shirt c) Trousers d) Sweater

10. If $N = 14$, $AN = 15$ and $ANT = 35$, then $AOS = ?$
a) 36 b) 34 c) 67 d) 35
11. Choose the word which is different from the rest.
a) Snail b) Lizard c) Snake d) Eagle
12. Raj's father is the only son of Reshma's father. How is Raj related to Reshma?
a) Father b) brother c) uncle d) nephew
13. In the English alphabet, which letter is exactly midway between the fifth letter from the left and the eighth letter from the right?
a) K b) L c) M d) J
14. If in a code language, finger is called toe, toe is called foot, foot is called thumb, thumb is called ankle, ankle is called palm, palm is called knee, then what will be an illiterate man put to mark his signatures?
a) Toe b) Knee c) Thumb d) Ankle
15. Find the odd one out
a) January b) November c) July d) August

Answer key

1 - c	2 - c	3 - c	4 - c	5 - b	6 - c	7 - b	8 - b	9 - c	10 - d	11 - d	12 - d	13 - b	14 - d	15 - b
-------	-------	-------	-------	-------	-------	-------	-------	-------	--------	--------	--------	--------	--------	--------