

AOS

ASIAN OLYMPIAD SOCIETY

ARAO

ASIAN REASONING & APTITUDE OLYMPIAD 2020-2021

CLASS
KG

INSTRUCTIONS AND INFORMATION FOR THE CANDIDATE

GENERAL

1. Do not open the booklet until told to do so by your teacher.
2. No calculators maths stencils, mobile phones or other calculating devices are permitted. Scribbling paper, graph paper, ruler and compasses are permitted, but are not essential.
3. Read the instructions on the answer sheet carefully. Ensure your name, school name and class are entered. It is your responsibility to correctly code your answer sheet.

THE ANSWER SHEET

1. Use an HB pencil or a Blue/Black ball point pen only to record your choice of answer in the Answer sheet.
2. Your answer sheet will be scanned. The optical scanner will attempt to read all markings even if they are in the wrong places, so please be careful not to write anything extra on the answer sheet.
3. If you want to change an answer or remove any marks, use a plastic eraser and be sure to remove all marks and smudges.
4. Fill your enrollment number clearly, improper enrollment number may lead to unavailability of result.
5. Please fill your Mobile Number clearly on the Answer Sheet, we will share your marks / result and other information related to AOS exams on your mobile number.
6. All questions are compulsory and there is no negative marking.
7. Return the ANSWER SHEET to the invigilator at the end of the exam.

INTEGRITY OF THE COMPETITION

The AOS reserves the right to re-examine students before deciding whether to grant official status to their score.


ENROLLMENT NUMBER : _____ CLASS : _____

STUDENT NAME : _____ Contact No : _____

1. Which one is different ?



2. How many happy faces are there inside the triangle



- a) 10 b) 11 c) 12 d) 13

3. Find the missing letter

A C E ___ I K

- a) K b) G c) F d) H

4. Which colour box has the largest number ?



- a) Yellow b) Red c) Blue d) Black

5. Which is exactly same as the given image?

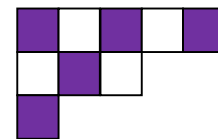


6. What is the missing number in the series?

0, 3, 6, ____, 12

- a) 8 b) 9 c) 10 d) 7

7. How many shaded squares are there?




- a) 5 b) 7 c) 6 d) 9


8. Identify the other half of the given picture.







9. If today is Monday, what will be tomorrow ?






- a) Tuesday b) Wednesday c) Thursday d) Friday





10. Given shape hidden 
- a)  b)  c)  d) 








11. How many triangles are there?
- 

- a) 7 b) 6 c) 8 d) 9

12. Which is the tallest ?
- a)  b)  c)  d) 

13. Complete the pattern  _____
- a)  b)  c)  d) 

14. Find the odd one
- a)  b)  c)  d) 

15. Find the next figure
-   
- a)  b)  c)  d) 

Answer key

1 - c	2 - a	3 - b	4 - d	5 - a	6 - b	7 - a	8 - d	9 - a	10 - d	11 - b	12 - b	13 - c	14 - c	15 - b
-------	-------	-------	-------	-------	-------	-------	-------	-------	--------	--------	--------	--------	--------	--------