

AOS

ASIAN OLYMPIAD SOCIETY

ASO

ASIAN SCIENCE OLYMPIAD 2020-2021

CLASS

3

INSTRUCTIONS AND INFORMATION FOR THE CANDIDATE

GENERAL

1. Do not open the booklet until told to do so by your teacher.
2. No calculators maths stencils, mobile phones or other calculating devices are permitted. Scribbling paper, graph paper, ruler and compasses are permitted, but are not essential.
3. Read the instructions on the answer sheet carefully. Ensure your name, school name and class are entered. It is your responsibility to correctly code your answer sheet.

THE ANSWER SHEET






1. Use an HB pencil or a Blue/Black ball point pen only to record your choice of answer in the Answer sheet.
2. Your answer sheet will be scanned. The optical scanner will attempt to read all markings even if they are in the wrong places, so please be careful not to write anything extra on the answer sheet.
3. If you want to change an answer or remove any marks, use a plastic eraser and be sure to remove all marks and smudges.
4. Fill your enrollment number clearly, improper enrollment number may lead to unavailability of result.
5. Please fill your Mobile Number clearly on the Answer Sheet, we will share your marks / result and other information related to AOS exams on your mobile number.
6. All questions are compulsory and there is no negative marking.
7. Return the ANSWER SHEET to the invigilator at the end of the exam.

INTEGRITY OF THE COMPETITION

The AOS reserves the right to re-examine students before deciding whether to grant official status to their score.

ENROLLMENT NUMBER : _____ CLASS : _____

STUDENT NAME : _____ Contact No : _____

1. The ultimate source of all energy in the universe is :
- a) Fire b) water c) wind d) sun
2. Which of the following is not a stem ?
- a)  b)  c)  d) 
3. Which of these is the oldest means of communication ?
- a) Letter b) Mobile phone c) Telegram d) E-mail
4. The tools shown in the given figure are used by a _____. 
- a) Plumber b) Barber c) Farmer d) Carpenter
5. It rains heavily during
- a) Monsoon b) Summer c) Winter d) Spring
6. Which of these is not an eye disease ?
- a) Cataract b) Dengue c) Glaucoma d) myopia
7. Food reaches to all parts of the body through ____
- a) Food b) vein c) blood d) saliva
8. Which of these is a star?
- a) The moon b) The Sun c) The Earth d) pole star
9. Which of the following plant is a herb?
- a) Mint b) rose c) banyan d) Tulsi
10. The Earths _____ causes the formation of seasons
- a) Rotation b) revolution c) spinning d) none of these

11. Which of the following animal does not chew its food?
a) Cow b) snake c) fish d) both b) and c)
12. _____ has a sweet and juicy stem.
a) Cabbage b) sugarcane c) apple d) ginger
13. Based on their eating habits Tigers are called
a) Herbivores b) Omnivores c) carnivores d) all of these
14. Birds that can swim in water have.
a) Webbed feet b) fins like fish c) white fur d) none of these
15. Which of the following is matched correctly?
a) Excretory system – Kidney b) skeletal system – brain
c) Nervous system – Liver d) circulatory system – stomach

Answer key

1 - d	2 - d	3 - a	4 - c	5 - a	6 - b	7 - c	8 - b	9 - a	10 - b	11 - d	12 - b	13 - c	14 - a	15 - a
-------	-------	-------	-------	-------	-------	-------	-------	-------	--------	--------	--------	--------	--------	--------