

AOS

ASIAN OLYMPIAD SOCIETY

ATHO

ASIAN TALENT HUNT OLYMPIAD 2020-2021

CLASS

2

INSTRUCTIONS AND INFORMATION FOR THE CANDIDATE

GENERAL

1. Do not open the booklet until told to do so by your teacher.
2. No calculators maths stencils, mobile phones or other calculating devices are permitted. Scribbling paper, graph paper, ruler and compasses are permitted, but are not essential.
3. Read the instructions on the answer sheet carefully. Ensure your name, school name and class are entered. It is your responsibility to correctly code your answer sheet.

THE ANSWER SHEET

1. Use an HB pencil or a Blue/Black ball point pen only to record your choice of answer in the Answer sheet.
2. Your answer sheet will be scanned. The optical scanner will attempt to read all markings even if they are in the wrong places, so please be careful not to write anything extra on the answer sheet.
3. If you want to change an answer or remove any marks, use a plastic eraser and be sure to remove all marks and smudges.
4. Fill your enrollment number clearly, improper enrollment number may lead to unavailability of result.
5. Please fill your Mobile Number clearly on the Answer Sheet, we will share your marks / result and other information related to AOS exams on your mobile number.
6. All questions are compulsory and there is no negative marking.
7. Return the ANSWER SHEET to the invigilator at the end of the exam.

INTEGRITY OF THE COMPETITION

The AOS reserves the right to re-examine students before deciding whether to grant official status to their score.


ENROLLMENT NUMBER : _____ CLASS : _____

STUDENT NAME : _____ Contact No : _____

1. Raja subtracted 4 repeatedly from 20 till she got 0. How many times did she subtract 4?
a) 3 b) 5 c) 4 d) 6

2. Which of the following is an odd number that can be divided exactly by 3?
a) 26 b) 24 c) 27 d) 30

3. How many rectangles are there in the following drawing?







a) 5 b) 8 c) 7 d) 9

4. The number 8 less than 37 is –
a) 18 b) 19 c) 29 d) 45

5. At quarter past one, the minute hand of a clock would be at ?
a) 1 b) between 1 and 2 c) 5 d) 3

6. Which number to be added to 999 to get 1000?
a) 10 b) 101 c) 1 d) 9001

7. A cow has 4 legs. How many pairs of legs do 5 horses have?
a) 9 b) 20 c) 10 d) 8

8. Which figure does not contain a vertex?
a)  b)  c)  d) 

9. Which number is 9 more than 29?
a) 36 b) 49 c) 38 d) 37

10. Which of the following birds is active during night?

a)  b)  c)  d) 

11. If your family is a nuclear family, which member will not live in your house?
a) Mother b) Father c) Grandfather d) Brother
12. What is the maximum number of milk teeth present in a child's mouth?
a) 10 b) 20 c) 32 d) 28
13. I am the part of a plant. I have long hairs to take up water and nutrients from the soil. Which part of plant am I?
a) Stem b) root c) leaf d) trunk
14. Which of these is a man made thing ?
a) Tree b) air c) cardamom d) cornflakes
15. Which of the following is not a good habit?
a) We should not talk while eating.
b) We should avoid eating uncovered or stale food.
c) We should start eating without washing hands to get maximum amount of food.
d) We should finish our plate.

Answer key

1 - b	2 - c	3 - d	4 - c	5 - d	6 - c	7 - c	8 - c	9 - c	10 - b	11 - c	12 - b	13 - b	14 - d	15 - c
-------	-------	-------	-------	-------	-------	-------	-------	-------	--------	--------	--------	--------	--------	--------