

AOS

ASIAN OLYMPIAD SOCIETY

ATHO

ASIAN TALENT HUNT OLYMPIAD 2020-2021

CLASS
KG

INSTRUCTIONS AND INFORMATION FOR THE CANDIDATE

GENERAL

1. Do not open the booklet until told to do so by your teacher.
2. No calculators maths stencils, mobile phones or other calculating devices are permitted. Scribbling paper, graph paper, ruler and compasses are permitted, but are not essential.
3. Read the instructions on the answer sheet carefully. Ensure your name, school name and class are entered. It is your responsibility to correctly code your answer sheet.

THE ANSWER SHEET










1. Use an HB pencil or a Blue/Black ball point pen only to record your choice of answer in the Answer sheet.
2. Your answer sheet will be scanned. The optical scanner will attempt to read all markings even if they are in the wrong places, so please be careful not to write anything extra on the answer sheet.
3. If you want to change an answer or remove any marks, use a plastic eraser and be sure to remove all marks and smudges.
4. Fill your enrollment number clearly, improper enrollment number may lead to unavailability of result.
5. Please fill your Mobile Number clearly on the Answer Sheet, we will share your marks / result and other information related to AOS exams on your mobile number.
6. All questions are compulsory and there is no negative marking.
7. Return the ANSWER SHEET to the invigilator at the end of the exam.

INTEGRITY OF THE COMPETITION

The AOS reserves the right to re-examine students before deciding whether to grant official status to their score.

ENROLLMENT NUMBER : _____ CLASS : _____

STUDENT NAME : _____ Contact No : _____

1. What will come between 16 and 18?
 a) 15 b) 19 c) 16 d) 17
2. How many squares are there in the given image?

 a) 5 b) 7 c) 12 d) 9
3. Fifteen is same as
 a) $10 + 5$ b) $7 + 9$ c) $10 + 10$ $10 + 0$
4. Which numbers are arranged in ascending order
 a) 1, 5, 2, 7 b) 1, 2, 3, 4, c) 5, 7, 6, 8 d) 7, 5, 4, 1
5. Twenty five is
 a) 15 b) 20 c) 25 d) 10
6. Number after 99 is _____
 a) 100 b) 10 c) 50 d) 75
7. 56 _____ 75
 a) Is greater than b) is smaller than c) is equal to d) none of these
8. 20 comes just after
 a) 15 b) 19 c) 21 d) 18
9. Put the correct sign
 $20 \text{ ____ } 25 = 45$
 a) + b) - c) x d) /
10. Find out the basket which contains flowers.
 a)  b)  c)  d) 
11. Which can see in the sky at night ?
 a)  b)  c)  d) 


12. Which of the following purifies the air and gives us fresh oxygen to breathe ?





13. Which of the following should be washed thoroughly before eating



14. Which is a domestic animal?



15. Pick the vegetable among the options given.



Answer key

1 - d	2 - c	3 - a	4 - b	5 - c	6 - a	7 - b	8 - b	9 - a	10 - a	11 - c	12 - a	13 - b	14 - a	15 - d
-------	-------	-------	-------	-------	-------	-------	-------	-------	--------	--------	--------	--------	--------	--------